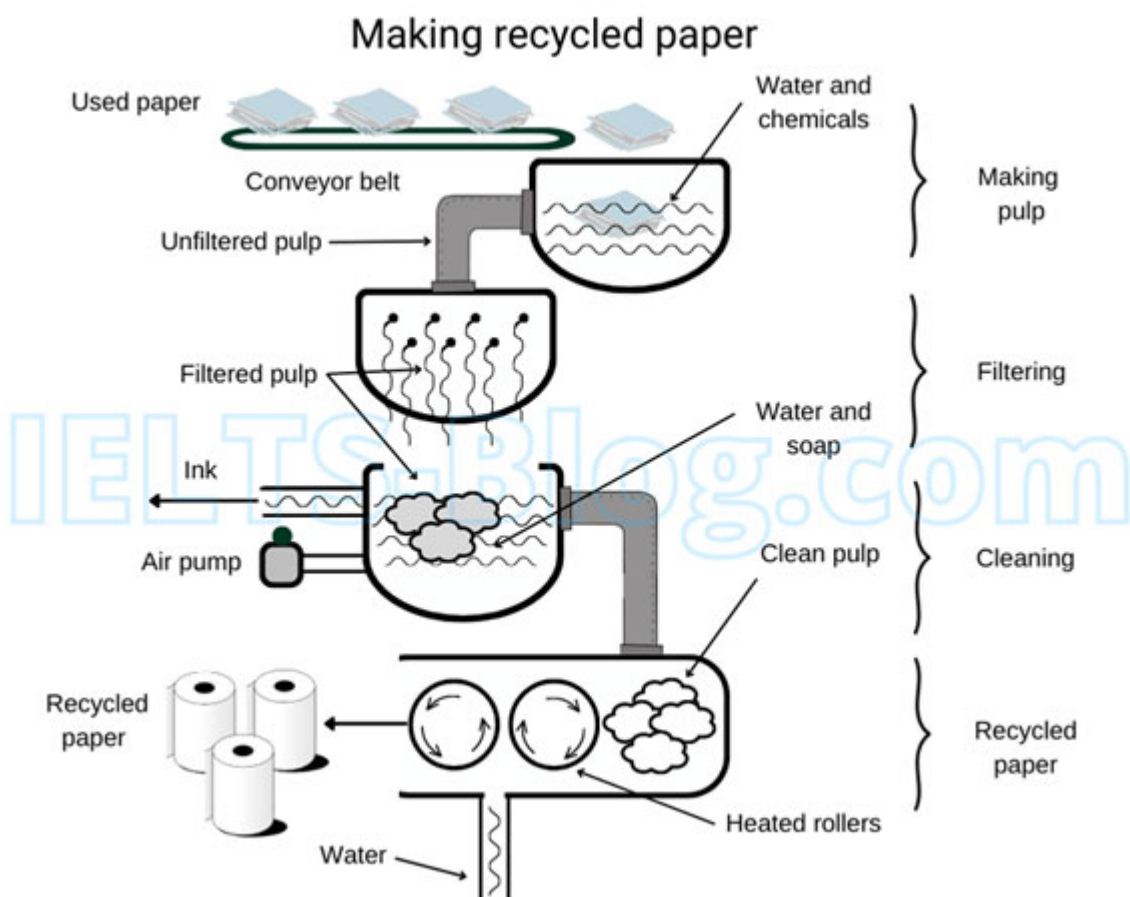


Academic Writing Task 1 Questions

Question 1

The diagram below describes the process of making recycled paper.

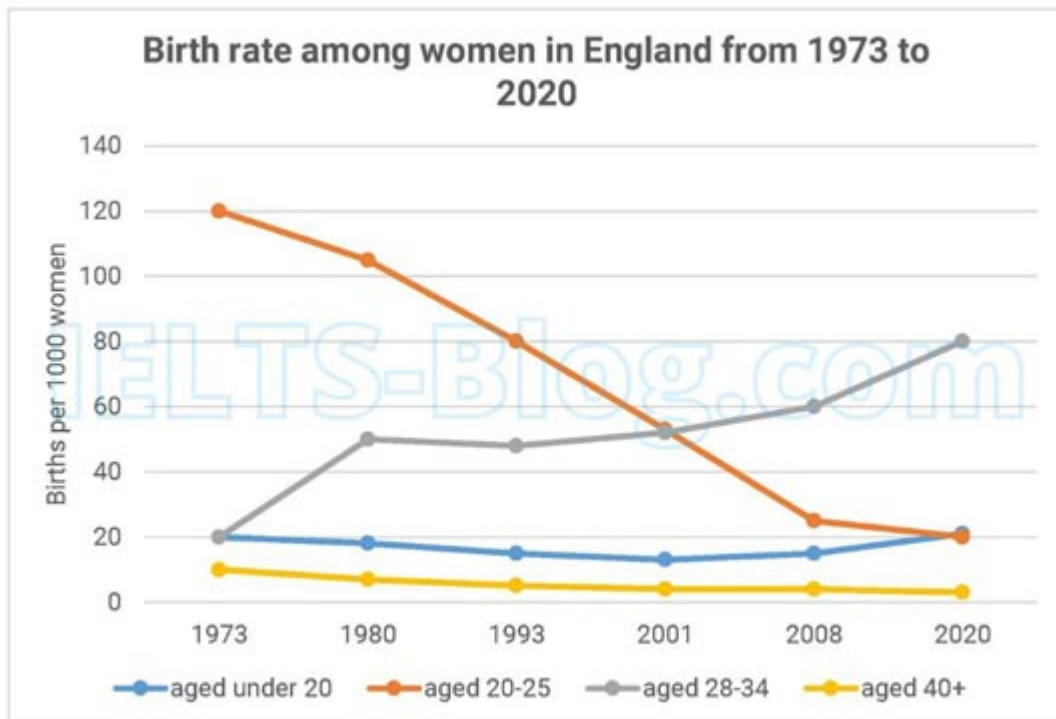
Summarise the information by selecting and reporting the main features and make comparisons where relevant.



Question 2

The chart below gives information on the birth rate among women in England, from 1973 to 2020. The figures are measured in births per 1000 women.

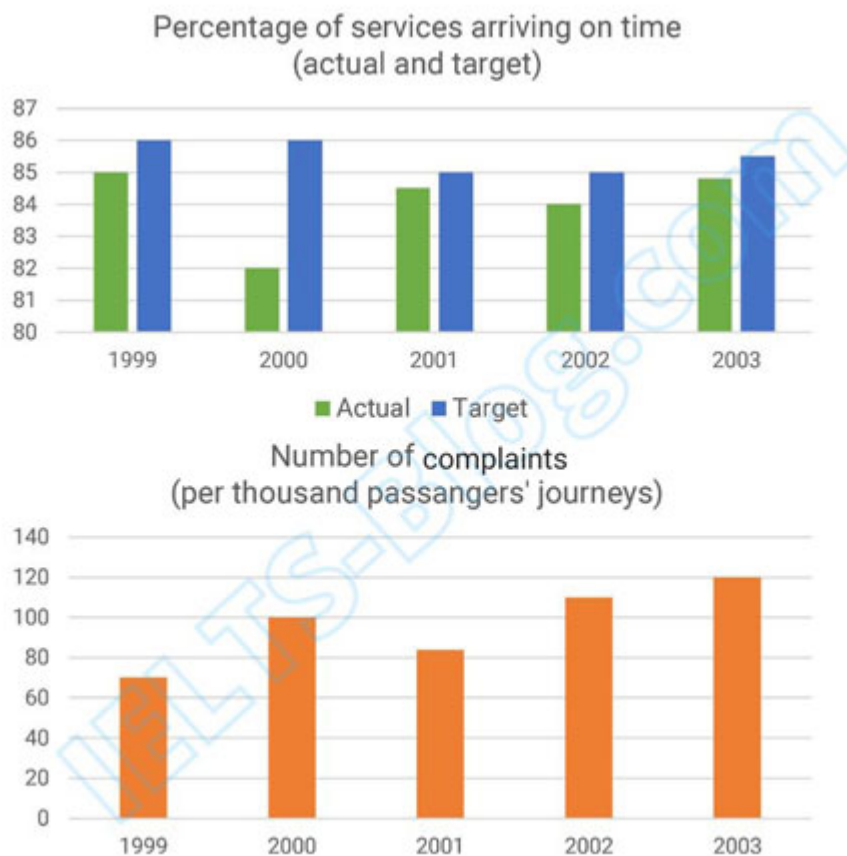
Summarise the information by selecting and reporting the main features and make comparisons where relevant.



Question 3

The charts below give information on a bus company's services between 1999 and 2003, including the target and actual percentage of buses that arrived on time, and the number of customer complaints.

Summarise the information by selecting and reporting the main features and make comparisons where relevant.



Question 4

The pie chart and table below give information on tourists visiting Australia.

Summarise the information by selecting and reporting the main features and make comparisons where relevant.

Tourists to Australia

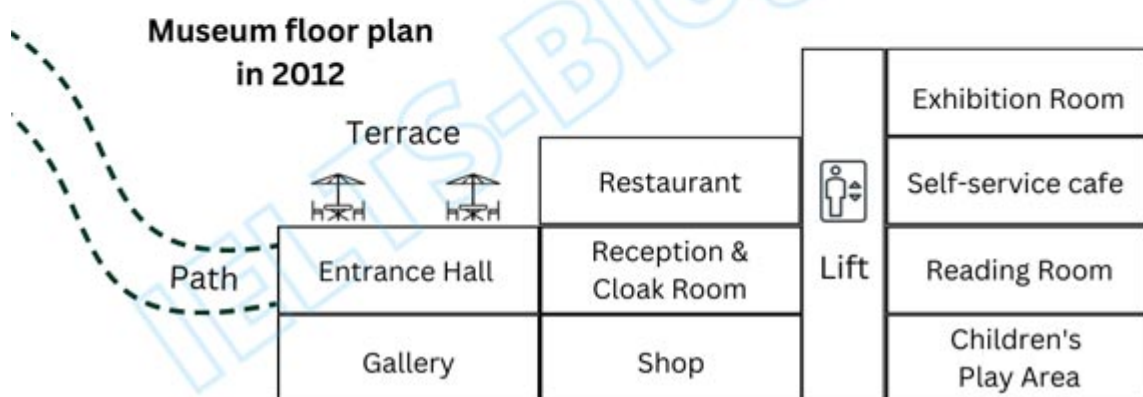
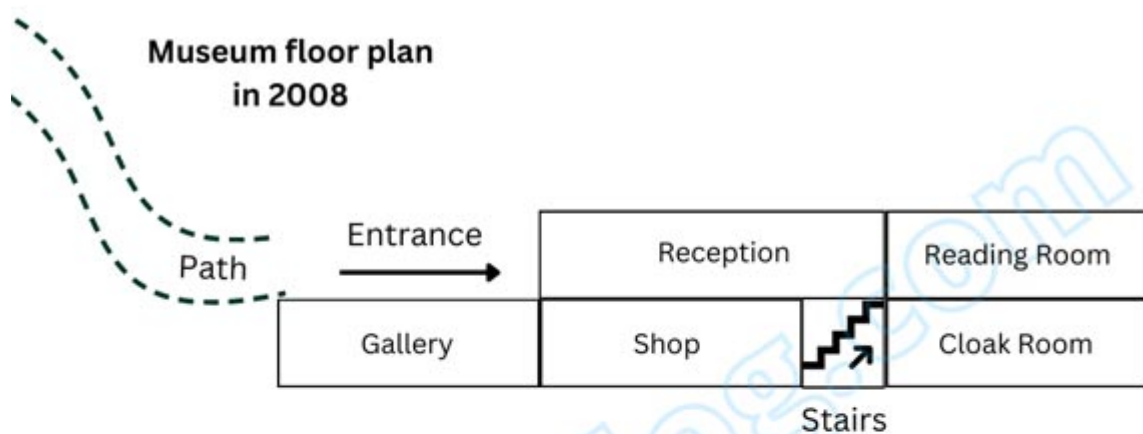


	Asia	USA	Europe	Rest of the World
Average length of stay	7 days	16 days	14 days	10 days
Accommodation	5-star hotels	Campgrounds/ caravan parks	4-star hotels	Campgrounds/ caravan parks
Main activity	Sightseeing	Swimming/ Sunbathing	Sightseeing	Surfing

Question 5

The two diagrams below describe changes to a museum's floor plan between 2008 and 2012.

Summarise the information by selecting and reporting the main features and make comparisons where relevant.



Question 6

The table below gives information on the temporary migrant workers in 4 countries, in 2003 and 2006.

Summarise the information by selecting and reporting the main features and make comparisons where relevant.

Migrant workers numbers in 2003 and 2006

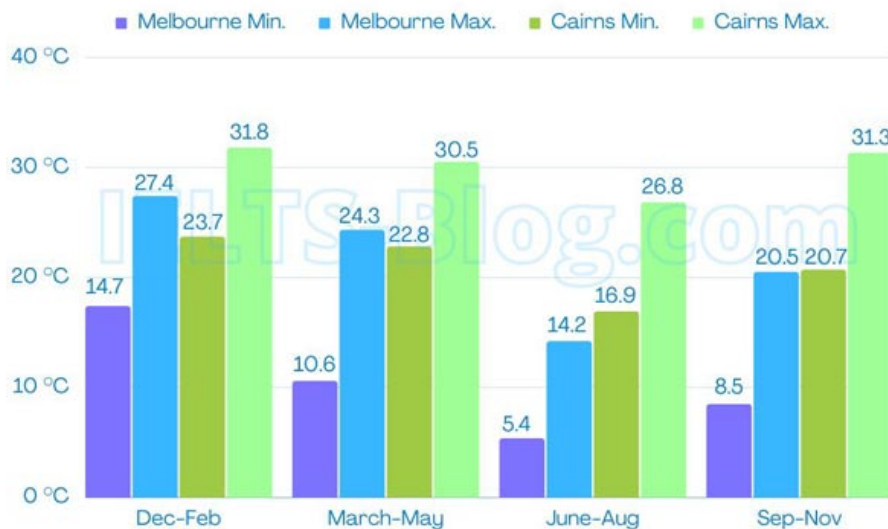
Country	2003	2006	Migrants per 1,000 population
UK	100,326	120,780	18.3
Australia	801,250	920,470	16.8
New Zealand	60,520	80,620	21.4
USA	900,325	1,000,240	19.6

Question 7

The charts below show the amount of rainfall and the average monthly maximum and minimum temperatures for two Australian cities in the year 2018.

Summarise the information by selecting and reporting the main features and make comparisons where relevant.

Average temperatures in Melbourne and Cairns



Average rainfall in Melbourne and Cairns

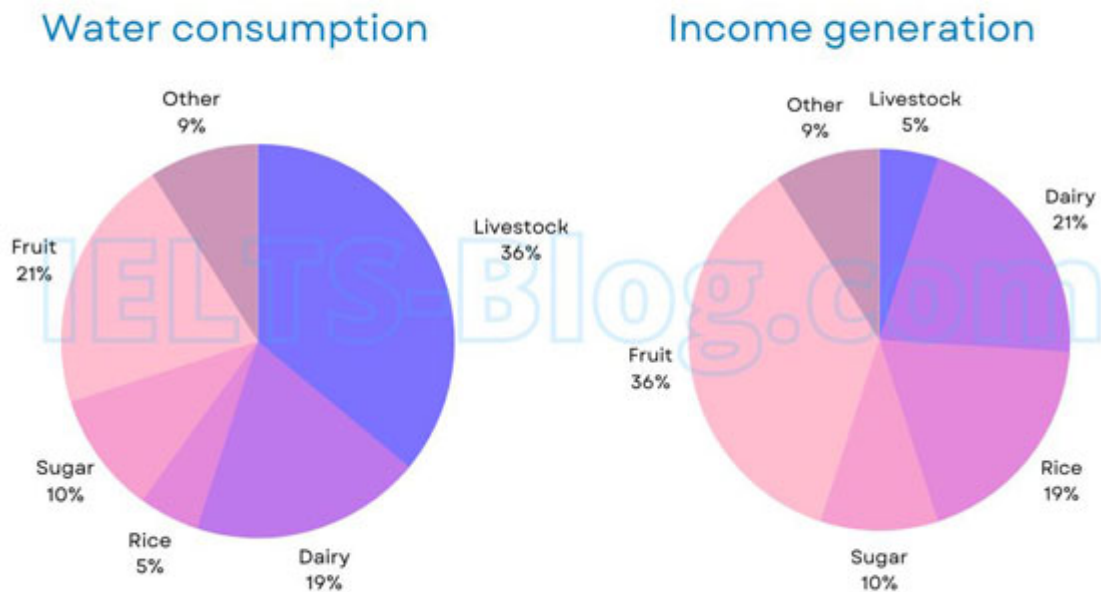


Question 8

The charts below give information on the consumption of water by agricultural products in Australia in 2014, and the share of income they produced.

Summarise the information by selecting and reporting the main features and make comparisons where relevant.

Water consumption & income generation by agriculture in Australia



Submit your writing

Get your writing checked by an IELTS expert - [click here to learn more](https://www.ielts-blog.com)